

Andhra Pradesh State Council of Higher Education

Notations :

- 1.Options shown in green color and with ✓ icon are correct.
- 2.Options shown in red color and with ✗ icon are incorrect.

Question Paper Name :	SANSKRIT 3rd May 2024 Shift 1
Duration :	120
Total Marks :	140
Display Marks:	No
Share Answer Key With Delivery Engine :	Yes
Calculator :	None
Magnifying Glass Required? :	No
Ruler Required? :	No
Eraser Required? :	No
Scratch Pad Required? :	No
Rough Sketch/Notepad Required? :	No
Protractor Required? :	No
Show Watermark on Console? :	Yes
Highlighter :	No
Auto Save on Console?	Yes
Change Font Color :	No
Change Background Color :	No
Change Theme :	No
Help Button :	No
Show Reports :	No

Show Progress Bar :	No
Is this Group for Examiner? :	No
Examiner permission :	Cant View
Show Progress Bar? :	No

Research Methodology

Section Id :	971036441
Section Number :	1
Mandatory or Optional :	Mandatory
Number of Questions :	66
Section Marks :	70
Enable Mark as Answered Mark for Review and Clear Response :	Yes
Maximum Instruction Time :	0
Is Section Default? :	null

Question Number : 1 Question Id : 97103631021 Display Question Number : Yes Is Question Mandatory : No Calculator : None Response Time : N.A Think Time : N.A Minimum Instruction Time : 0

Which of the following is the main objective of teaching?

Options :

1. ✘ To give information related to the syllabus
2. ✘ Help the students in getting jobs
3. ✔ To develop thinking capability of students

4. ✘ Prepare the students for examination.

Question Number : 2 Question Id : 97103631022 Display Question Number : Yes Is Question Mandatory : No Calculator : None Response Time : N.A Think Time : N.A Minimum Instruction Time : 0

Which of the following is not a level of teaching learning?

Options :

1. ✘ Memory level

2. ✔ Differentiation level

3. ✘ Reflective level

4. ✘ Understanding level

Question Number : 3 Question Id : 97103631023 Display Question Number : Yes Is Question Mandatory : No Calculator : None Response Time : N.A Think Time : N.A Minimum Instruction Time : 0

An effective teacher will ensure _____

Options :

1. ✘ Laissez-failure

2. ✘ Competition among students

3. ✔ Competition or cooperation as the situation demands

4. ✘ Cooperation among his students

Question Number : 4 Question Id : 97103631024 Display Question Number : Yes Is Question Mandatory : No Calculator : None Response Time : N.A Think Time : N.A Minimum Instruction Time : 0

Morphograph is the term associated with _____

Options :

1. ✔ Corrective spelling
2. ✘ Corrective learning
3. ✘ Corrective behavior
4. ✘ Corrective reading

Question Number : 5 Question Id : 97103631025 Display Question Number : Yes Is Question Mandatory : No Calculator : None Response Time : N.A Think Time : N.A Minimum Instruction Time : 0

Which of the following is NOT associated with micro-teaching ?

Options :

1. ✘ Knowledge acquiring
2. ✘ Skill training
3. ✔ Atomic teaching procedure

4. ✘ Content transfer

Question Number : 6 Question Id : 97103631026 Display Question Number : Yes Is Question Mandatory : No Calculator : None Response Time : N.A Think Time : N.A Minimum Instruction Time : 0

The main aim of 'National Council for Teacher Education' is _____

Options :

1. ✘ To promote research in education
2. ✔ To maintain standards in colleges of education
3. ✘ To provide grant to colleges of education
4. ✘ To open colleges in education

Question Number : 7 Question Id : 97103631027 Display Question Number : Yes Is Question Mandatory : No Calculator : None Response Time : N.A Think Time : N.A Minimum Instruction Time : 0

Which of the following is a Massive Open Online Course (MOOCs) platform created by the MHRD, Govt. of India?

Options :

1. ✔ SWAYAM
2. ✘ PRATHAM

3. ✘ OPEN LEARN

4. ✘ FUTURE LEARN

Question Number : 8 Question Id : 97103631028 Display Question Number : Yes Is Question Mandatory : No Calculator : None Response Time : N.A Think Time : N.A Minimum Instruction Time : 0

Which of the following does not belong to a projected aid?

Options :

1. ✘ Overhead projector

2. ✔ Black board

3. ✘ Epidiascope

4. ✘ Slide projector

Question Number : 9 Question Id : 97103631029 Display Question Number : Yes Is Question Mandatory : No Calculator : None Response Time : N.A Think Time : N.A Minimum Instruction Time : 0

The purpose of formative evaluation is to _____

Options :

1. ✔ Accelerate student's learning performance

2. ✘ Provide a feedback to teacher effectiveness
3. ✘ Grade students learning outcomes
4. ✘ Check student's performance graph

Question Number : 10 Question Id : 97103631030 Display Question Number : Yes Is Question Mandatory : No Calculator : None Response Time : N.A Think Time : N.A Minimum Instruction Time : 0

Assertion (A): Learning is a lifelong process

Reason (R): Learning to be useful must be linked with life process.

Choose correct answer from the following

Options :

1. ✔ Both (A) and (R) are true and (R) is the correct explanation of (A)
2. ✘ Both (A) and (R) are true, but (R) is not the correct explanation of (A)
3. ✘ (A) is true, but (R) is false
4. ✘ (A) is false, but (R) is true

Question Number : 11 Question Id : 97103631031 Display Question Number : Yes Is Question Mandatory : No Calculator : None Response Time : N.A Think Time : N.A Minimum Instruction Time : 0

'Gyan Darshan' launched by IGNOU refers to which one of the following?

Options :

1. ✓ Satellite based educational T.V. channel
2. ✗ Educational F.M radio network
3. ✗ Global initiative of academic networks
4. ✗ Online courses

Question Number : 12 Question Id : 97103631032 Display Question Number : Yes Is Question Mandatory : No Calculator : None Response Time : N.A Think Time : N.A Minimum Instruction Time : 0

Which of the sets of activities best indicate the cyclic nature of action research strategy?

Options :

1. ✗ Reflect, Observe, Plan, Act
2. ✓ Plan, Act, Observe, Reflect
3. ✗ Act, Plan, Observe, Reflect
4. ✗ Observe, Act, Reflect, Plan

Question Number : 13 Question Id : 97103631033 Display Question Number : Yes Is Question Mandatory : No Calculator : None Response Time : N.A Think Time : N.A Minimum Instruction

Time : 0

Which of the following research types has a potential for enhancing teaching competencies?

Options :

1. ✘ Fundamental research
2. ✘ Applied research
3. ✘ Impact assessment research
4. ✔ Action research

Question Number : 14 Question Id : 97103631034 Display Question Number : Yes Is Question Mandatory : No Calculator : None Response Time : N.A Think Time : N.A Minimum Instruction

Time : 0

Which of the following is the main aim of interdisciplinary research?

Options :

1. ✔ To bring out holistic approach to research
2. ✘ To over simplify the problem of research
3. ✘ To reduce the emphasis of single subject in research domain
4. ✘ To create a new trend in research methods

Question Number : 15 Question Id : 97103631035 Display Question Number : Yes Is Question Mandatory : No Calculator : None Response Time : N.A Think Time : N.A Minimum Instruction Time : 0

Manipulation is always a part of _____

Options :

1. ✘ Fundamental research
2. ✘ Descriptive research
3. ✔ Experimental research
4. ✘ Historical research

Question Number : 16 Question Id : 97103631036 Display Question Number : Yes Is Question Mandatory : No Calculator : None Response Time : N.A Think Time : N.A Minimum Instruction Time : 0

A thesis statement is _____

Options :

1. ✘ A fact
2. ✘ An observation
3. ✘ A discussion
4. ✔ An Assumption

Question Number : 17 Question Id : 97103631037 Display Question Number : Yes Is Question Mandatory : No Calculator : None Response Time : N.A Think Time : N.A Minimum Instruction Time : 0

Which of the following is an indication of the quality of a research journal?

Options :

1. ✘ g-index
2. ✘ h-index
3. ✔ impact factor
4. ✘ i10-index

Question Number : 18 Question Id : 97103631038 Display Question Number : Yes Is Question Mandatory : No Calculator : None Response Time : N.A Think Time : N.A Minimum Instruction Time : 0

A hypothesis is a _____

Options :

1. ✘ Postulate
2. ✘ Law
3. ✘ Canon
4. ✔ Supposition

Question Number : 19 Question Id : 97103631039 Display Question Number : Yes Is Question Mandatory : No Calculator : None Response Time : N.A Think Time : N.A Minimum Instruction Time : 0

Ethical norms in research do not involve guidelines for _____

Options :

1. ✘ Copyright

2. ✔ Thesis format

3. ✘ Patenting policy

4. ✘ Data sharing policies

Question Number : 20 Question Id : 97103631040 Display Question Number : Yes Is Question Mandatory : No Calculator : None Response Time : N.A Think Time : N.A Minimum Instruction Time : 0

Which of the following is a research tool?

Options :

1. ✘ Illustration

2. ✘ Graph

3. ✔ Questionnaire

4. ✖ Diagram

Is Section Default? : null

Question Id : 97103631041 Sub Question Shuffling Allowed : Yes Group Comprehension

Questions : No Question Pattern Type : NonMatrix Calculator : None Response Time : N.A

Think Time : N.A Minimum Instruction Time : 0

Question Numbers : (21 to 25)

Read the Passage and answer the following questions:

The Taj Mahal has become one of the world's best known monuments. This domed white marble structure is situated on a high plinth at the southern end of a four-quartered garden, evoking the gardens of paradise, enclosed within walls measuring 305 by 549 metres. Outside the walls, in an area known as Mumtazabad, were living quarters for attendants, markets, serais and other structures built by local merchants and nobles. The tomb complex and the other imperial structures of Mumtazabad were maintained by the income of thirty villages given specifically for the tomb's support. The name Taj Mahal is unknown in Mughal chronicles, but it is used by contemporary Europeans in India, suggesting that this was the tomb's popular name. In contemporary texts, it is simply called the illuminated tomb (Rauza-i-Munavvara).

Mumtaz Mahal died shortly after delivering her fourteenth child in 1631. The Mughal court was then residing in Burhanpur. Her remains were temporarily buried by the grief-stricken emperor in a spacious garden known as Zainabad on the bank of the river Tapti. Six months later, her body was transported to Agra, where it was interred in land chosen for the mausoleum. This land, situated south of the Mughal city on the bank of the Jamuna, had belonged to the Kachwaha rajas since the time of Raja Man Singh and was purchased from the then current raja, Jai Singh. Although contemporary chronicles indicate Jai Singh's willing cooperation in this exchange, extant farmans (imperial commands) indicate that the final price was not settled until almost two years after the mausoleum's commencement. Jai Singh's further cooperation was insured by imperial orders issued between 1632 and 1637 demanding that he provide stone masons and carts to transport marble from the mines at Makrana, within his 'ancestral domain', to Agra where both the Taj Mahal and Shah Jahan's additions to the Agra fort were constructed concurrently.

Work on the mausoleum was commenced early in 1632. Inscriptional evidence indicates much of the tomb was completed by 1636. By 1643, when Shah Jahan most lavishly celebrated the 'Urs ceremony for Mumtaz Mahal', the entire complex was virtually complete.

Sub questions

Question Number : 21 Question Id : 97103631042 Display Question Number : Yes Is Question Mandatory : No Calculator : None Response Time : N.A Think Time : N.A Minimum Instruction Time : 0

Marble stone used for the construction of Taj Mahal was brought from the ancestral domain of Raja Jai Singh. The name of the place where mines of marble were situated, is _____

Options :

1. ✘ Burhanpur
2. ✔ Makrana
3. ✘ Amber
4. ✘ Jaipur

Question Number : 22 Question Id : 97103631043 Display Question Number : Yes Is Question Mandatory : No Calculator : None Response Time : N.A Think Time : N.A Minimum Instruction Time : 0

The popular name Taj Mahal was given by____

Options :

1. ✘ Shah Jahan
2. ✘ Muntaz Mahal
3. ✘ Jai Singh
4. ✔ Europeans

Question Number : 23 Question Id : 97103631044 Display Question Number : Yes Is Question Mandatory : No Calculator : None Response Time : N.A Think Time : N.A Minimum Instruction Time : 0

Point out the true statement from the following.

Options :

1. ✘ Marble was not used for construction of the Taj Mahal.
2. ✘ Red sand stone is non-visible in Taj Mahal complex.
3. ✔ The Taj Mahal is surrounded by a four-quartered garden known as Chahr Bagh
4. ✘ The Taj Mahal was constructed to celebrate the 'Urs ceremony for Mumtaz Mahal'

Question Number : 24 Question Id : 97103631045 Display Question Number : Yes Is Question Mandatory : No Calculator : None Response Time : N.A Think Time : N.A Minimum Instruction Time : 0

In the contemporary texts, Taj Mahal is known _____

Options :

1. ✘ Mumtazabad
2. ✘ Mumtaz Mahal
3. ✘ Zainabad
4. ✔ Rauza-i-Munavvara

Question Number : 25 Question Id : 97103631046 Display Question Number : Yes Is Question Mandatory : No Calculator : None Response Time : N.A Think Time : N.A Minimum Instruction Time : 0

The document indicating the ownership of land, where Taj Mahal was built, is known as __

Options :

1. ✓ Farman
2. ✗ Sale deed
3. ✗ Sale-purchase deed
4. ✗ Gift deed

Is Section Default? : null

Question Number : 26 Question Id : 97103631047 Display Question Number : Yes Is Question Mandatory : No Calculator : None Response Time : N.A Think Time : N.A Minimum Instruction Time : 0

Telephone is an example of _____

Options :

1. ✓ Linear communication
2. ✗ Non-linear communication
3. ✗ Circular communication

4. ✘ Mechanized communication

Question Number : 27 Question Id : 97103631048 Display Question Number : Yes Is Question Mandatory : No Calculator : None Response Time : N.A Think Time : N.A Minimum Instruction Time : 0

The mode of communication that involves a single source transmitting information to a large number of receivers simultaneously, is called _____

Options :

1. ✘ Group communication
2. ✔ Mass communication
3. ✘ Interpersonal communication
4. ✘ Intrapersonal communication

Question Number : 28 Question Id : 97103631049 Display Question Number : Yes Is Question Mandatory : No Calculator : None Response Time : N.A Think Time : N.A Minimum Instruction Time : 0

In communication, the language is _____

Options :

1. ✘ The non-verbal code
2. ✔ The verbal code

3. ✘ The symbolic code

4. ✘ The iconic code

Question Number : 29 Question Id : 97103631050 Display Question Number : Yes Is Question Mandatory : No Calculator : None Response Time : N.A Think Time : N.A Minimum Instruction Time : 0

Chatting in internet is _____ type of communication

Options :

1. ✘ Parallel communication

2. ✘ Grapevine communication

3. ✔ Verbal communication

4. ✘ Non-verbal communication

Question Number : 30 Question Id : 97103631051 Display Question Number : Yes Is Question Mandatory : No Calculator : None Response Time : N.A Think Time : N.A Minimum Instruction Time : 0

Which group of communicating aspects does not disrupt the communication process in the class?

Options :

1. ✘ Evaluating - focusing - exaggerating

2. ✓ Focusing – illustrating - exaggerating

3. ✘ Evaluating – focusing - illustrating

4. ✘ Reversing – Evaluating – focusing

Question Number : 31 Question Id : 97103631052 Display Question Number : Yes Is Question Mandatory : No Calculator : None Response Time : N.A Think Time : N.A Minimum Instruction Time : 0

Which of the following can be termed as verbal communication?

Options :

1. ✘ The child was crying to the attention of the mother

2. ✘ Signal at the cross-road changed from green to orange

3. ✓ Professor RAM delivered the lecture in the class room

4. ✘ Deepika wrote a letter for leave application

Question Number : 32 Question Id : 97103631053 Display Question Number : Yes Is Question Mandatory : No Calculator : None Response Time : N.A Think Time : N.A Minimum Instruction Time : 0

The first Indian satellite for serving the educational sector is _____

Options :

1.

✘ INSAT-B

2. ✔ EDUSAT

3. ✘ INSAT-C

4. ✘ SATEDU

Question Number : 33 Question Id : 97103631054 Display Question Number : Yes Is Question Mandatory : No Calculator : None Response Time : N.A Think Time : N.A Minimum Instruction Time : 0

In analog mass communication, stories are _____

Options :

1. ✔ Static

2. ✘ Dynamic

3. ✘ Interactive

4. ✘ Exploratory

Question Number : 34 Question Id : 97103631055 Display Question Number : Yes Is Question Mandatory : No Calculator : None Response Time : N.A Think Time : N.A Minimum Instruction Time : 0

If a certain code MANISH is written as NZMRHS, then how will RANJITA be written in the same code?

Options :

1. ✘ IZMPRGZ
2. ✘ IZMQRIZ
3. ✔ IZMQRGZ
4. ✘ IZMQRHZ

Question Number : 35 Question Id : 97103631056 Display Question Number : Yes Is Question Mandatory : No Calculator : None Response Time : N.A Think Time : N.A Minimum Instruction Time : 0

A is father of C and D is son of B. E is brother of A. If C is sister of D, how is B related to E?

Options :

1. ✘ Brother-in-law
2. ✔ Sister-in-law
3. ✘ Husband
4. ✘ Daughter

Question Number : 36 Question Id : 97103631057 Display Question Number : Yes Is Question Mandatory : No Calculator : None Response Time : N.A Think Time : N.A Minimum Instruction Time : 0

Complete the series Q1F, S2E, U6D, W21C, _____

Options :

1. ✘ Y66B

2. ✘ Y44B

3. ✔ Y88B

4. ✘ Z88B

Question Number : 37 Question Id : 97103631058 Display Question Number : Yes Is Question Mandatory : No Calculator : None Response Time : N.A Think Time : N.A Minimum Instruction Time : 0

If SHARP is coded as 58034 and PUSH is coded as 4658 then RUSH is coded as ____

Options :

1. ✘ 3568

2. ✔ 3658

3. ✘ 3685

4. ✘ 3583

Question Number : 38 Question Id : 97103631059 Display Question Number : Yes Is Question Mandatory : No Calculator : None Response Time : N.A Think Time : N.A Minimum Instruction Time : 0

RIDE : LNBE :: HELP : ?

Options :

1. ✘ NINP

2. ✘ BAJP

3. ✔ BJJP

4. ✘ JPCH

Question Number : 39 Question Id : 97103631060 Display Question Number : Yes Is Question Mandatory : No Calculator : None Response Time : N.A Think Time : N.A Minimum Instruction Time : 0

The ratio of the boys and girls in a school is 7:6. If 100 boys join in the school, the ratio would become 5:4 then the number of girls in the school is _____

Options :

1. ✘ 200

2. ✘ 800

3. ✔ 1200

4. ✘ 1600

Question Number : 40 Question Id : 97103631061 Display Question Number : Yes Is Question Mandatory : No Calculator : None Response Time : N.A Think Time : N.A Minimum Instruction Time : 0

What is the least number to be subtracted from 696 to be it a perfect square?

Options :

1. ✘ 1

2. ✘ 16

3. ✔ 20

4. ✘ 71

Question Number : 41 Question Id : 97103631062 Display Question Number : Yes Is Question Mandatory : No Calculator : None Response Time : N.A Think Time : N.A Minimum Instruction Time : 0

If a trader sold two cars each at Rs.325475 and gains 12% on the first and losses 12% on the second, then his profit or loss percentage on the whole is _____

Options :

1. ✘ 14.4% profit

2. ✔ 1.44% loss

3. ✘ 14.4% loss

4. ✘ 0%

Question Number : 42 Question Id : 97103631063 Display Question Number : Yes Is Question Mandatory : No Calculator : None Response Time : N.A Think Time : N.A Minimum Instruction Time : 0

At what rate of interest is an amount doubled in two years, when compounded annually?

Options :

1. ✘ 30 %

2. ✘ 45.2 %

3. ✔ 41.4 %

4. ✘ 73.2 %

Question Number : 43 Question Id : 97103631064 Display Question Number : Yes Is Question Mandatory : No Calculator : None Response Time : N.A Think Time : N.A Minimum Instruction Time : 0

If 24 men can do a work in 35 days, how many men are required to complete the work in 21 days?

Options :

1. ✘ 38

2. ✘ 36

3. ✔ 40

4. ✘ 42

Question Number : 44 Question Id : 97103631065 Display Question Number : Yes Is Question Mandatory : No Calculator : None Response Time : N.A Think Time : N.A Minimum Instruction Time : 0

A train travels for 9 hours. It travelled the first half of the distance at 12 kmph and remaining distance at 15 kmph. Find the distance.

Options :

1. ✔ 120

2. ✘ 180

3. ✘ 920

4. ✘ 60

Question Number : 45 Question Id : 97103631066 Display Question Number : Yes Is Question Mandatory : No Calculator : None Response Time : N.A Think Time : N.A Minimum Instruction Time : 0

Which of the following groups of fractions is in descending order?

Options :

1. ✘ $\frac{8}{5}, \frac{9}{13}, \frac{6}{11}$

2. ✘ $\frac{8}{15}, \frac{6}{11}, \frac{9}{13}$

3. ✔ $\frac{9}{13}, \frac{6}{11}, \frac{8}{15}$

4. ✘ $\frac{6}{11}, \frac{8}{15}, \frac{9}{13}$

Question Number : 46 Question Id : 97103631067 Display Question Number : Yes Is Question Mandatory : No Calculator : None Response Time : N.A Think Time : N.A Minimum Instruction Time : 0

Consider the statements :

- I. I watch TV only if I am bored
- II. I am never bored when I have my brother's company
- III. Whenever I go to the theatre I take my brother along.

Which one of the following conclusions is valid in the content of the above statements.

Options :

1. ✘ If I am bored, I watch TV

2. ✘ If I am bored, I seek my brother's company.

3. ✘ If I am not with my brother, then I watch TV

4. ✔ If I am not bored, I do not watch TV

Question Number : 47 Question Id : 97103631068 Display Question Number : Yes Is Question Mandatory : No Calculator : None Response Time : N.A Think Time : N.A Minimum Instruction Time : 0

Find the number of triangles in the given figure.



Options :

1. ✘ 8

2. ✘ 10

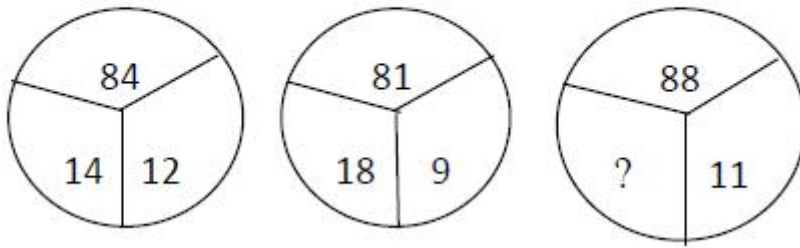
3. ✔ 14

4. ✘ 12

Question Number : 48 Question Id : 97103631069 Display Question Number : Yes Is Question Mandatory : No Calculator : None Response Time : N.A Think Time : N.A Minimum Instruction

Time : 0

Select the missing number from the following.



Options :

1. ✘ 10

2. ✘ 12

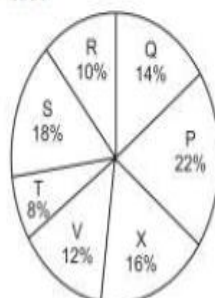
3. ✘ 14

4. ✔ 16

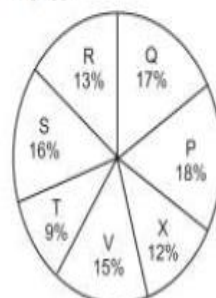
Question Number : 49 Question Id : 97103631070 Display Question Number : Yes Is Question Mandatory : No Calculator : None Response Time : N.A Think Time : N.A Minimum Instruction Time : 0

Study the following pie graphs carefully and answer the questions given below. Distribution of Candidates Enrolled For M.B.A. Entrance Examination And Those Who Passed In Different Institutes : P, Q, R, S, T, V and X.

Candidates Enrolled
= 8550



Candidates Who Passed
= 5700



What percentage of candidates passed the Exam from institute T out of the total number of candidates enrolled from the same institute?

Options :

1. ✘ 50%


2. ✘ 62.5%

3. ✔ 75%

4. ✘ 80%

Question Number : 50 Question Id : 97103631071 Display Question Number : Yes Is Question Mandatory : No Calculator : None Response Time : N.A Think Time : N.A Minimum Instruction Time : 0

Study the following pie graphs carefully and answer the questions given below. Distribution of Candidates Enrolled For M.B.A. Entrance Examination And Those Who Passed In Different Institutes : P, Q, R, S, T, V and X.



What is the ratio of candidates passed to the candidates enrolled from institute P?

Options :

1. ✘ 9 : 11


2. ✘ 14 : 17

3. ✔ 6 : 11

4. ✘ 9 : 17

Question Number : 51 Question Id : 97103631072 Display Question Number : Yes Is Question Mandatory : No Calculator : None Response Time : N.A Think Time : N.A Minimum Instruction Time : 0

Study the following pie graphs carefully and answer the questions given below. Distribution of Candidates Enrolled For M.B.A. Entrance Examination And Those Who Passed In Different Institutes : P, Q, R, S, T, V and X.



What is the percentage of candidates passed to the candidates enrolled for institutes Q and R together?

Options :

1. ✘ 68%


2. ✔ 83%

3. ✘ 74%

4. ✘ 65%

Question Number : 52 Question Id : 97103631073 Display Question Number : Yes Is Question Mandatory : No Calculator : None Response Time : N.A Think Time : N.A Minimum Instruction Time : 0

Study the following pie graphs carefully and answer the questions given below. Distribution of Candidates Enrolled For M.B.A. Entrance Examination And Those Who Passed In Different Institutes : P, Q, R, S, T, V and X.



Which institute has the highest percentage of candidates passed to the candidates enrolled?

Options :

1. ✘ Q


2. ✔ R

3. ✘ V

4. ✘ T

Question Number : 53 Question Id : 97103631074 Display Question Number : Yes Is Question Mandatory : No Calculator : None Response Time : N.A Think Time : N.A Minimum Instruction Time : 0

Study the following pie graphs carefully and answer the questions given below. Distribution of Candidates Enrolled For M.B.A. Entrance Examination And Those Who Passed In Different Institutes : P, Q, R, S, T, V and X.



The number of candidates passed from institutes S and P together exceeds the number of candidates enrolled from institutes T and R together by

Options :

1. ✘ 228
2. ✘ 279
3. ✔ 399
4. ✘ 407

Question Number : 54 Question Id : 97103631075 Display Question Number : Yes Is Question Mandatory : No Calculator : None Response Time : N.A Think Time : N.A Minimum Instruction Time : 0

Which of the following is not a network device?

Options :

1. ✓ CPU

2. ✗ Switch

3. ✗ Hub

4. ✗ Router

Question Number : 55 Question Id : 97103631076 Display Question Number : Yes Is Question Mandatory : No Calculator : None Response Time : N.A Think Time : N.A Minimum Instruction Time : 0

A Gigabyte is equal to _____

Options :

1. ✗ 1024 bytes

2. ✗ 1024 kilobytes

3. ✓ 1024 megabytes

4. ✗ 1024 terabytes

Question Number : 56 Question Id : 97103631077 Display Question Number : Yes Is Question Mandatory : No Calculator : None Response Time : N.A Think Time : N.A Minimum Instruction Time : 0

A computer program that translates a program statement by statement into machine language is called _____

Options :

1. ✘ A compiler
2. ✔ An interpreter
3. ✘ A translator
4. ✘ A simulation

Question Number : 57 Question Id : 97103631078 Display Question Number : Yes Is Question Mandatory : No Calculator : None Response Time : N.A Think Time : N.A Minimum Instruction Time : 0

Which of the following is correct for $(17)_{10}$.

Options :

1. ✘ $(10011)_2$
2. ✘ $(10111)_2$
3. ✔ $(10001)_2$

4. ✘ $(11001)_2$

Question Number : 58 Question Id : 97103631079 Display Question Number : Yes Is Question Mandatory : No Calculator : None Response Time : N.A Think Time : N.A Minimum Instruction Time : 0

Which of the following protocol supports to link from one webpage to another page?

Options :

1. ✘ HTML

2. ✘ IP

3. ✘ FTP

4. ✔ HTTP

Question Number : 59 Question Id : 97103631080 Display Question Number : Yes Is Question Mandatory : No Calculator : None Response Time : N.A Think Time : N.A Minimum Instruction Time : 0

Which of the following is the biggest news agency in India?

Options :

1. ✘ UNI

2. ✔ PTI

3. ✘ NAAP

4. ✖ Samachar Bharathi

Question Number : 60 Question Id : 97103631081 Display Question Number : Yes Is Question Mandatory : No Calculator : None Response Time : N.A Think Time : N.A Minimum Instruction Time : 0

The purpose of ICT use in education is to _____

Options :

1. ✖ Make teaching interesting
2. ✖ Attract students
3. ✔ Optimize learning process
4. ✖ Promote technology in teaching

Question Number : 61 Question Id : 97103631082 Display Question Number : Yes Is Question Mandatory : No Calculator : None Response Time : N.A Think Time : N.A Minimum Instruction Time : 0

Which of the following mobile payment application is developed by the National Payments Corporation of India based on UPI?

Options :

1. ✖ MYGOV

2. ✓ BHIM

3. ✗ UMANG

4. ✗ Phone pay

Question Number : 62 Question Id : 97103631083 Display Question Number : Yes Is Question Mandatory : No Calculator : None Response Time : N.A Think Time : N.A Minimum Instruction Time : 0

Assertion(A): Night time temperature in the central parts of a city are generally higher than those over the surrounding rural areas.

Reason(R): Radiation losses over the urban areas are less than that over the rural areas.

Choose the correct answer from the options given below.

Options :

1. ✓ Both (A) and (R) are true and (R) is the correct explanation of (A).

2. ✗ Both (A) and (R) are true but (R) is not the correct explanation of (A).

3. ✗ (A) true, but (R) is false.

4. ✗ (A) is false, but (R) is true

Question Number : 63 Question Id : 97103631084 Display Question Number : Yes Is Question

Mandatory : No Calculator : None Response Time : N.A Think Time : N.A Minimum Instruction Time : 0

Which of the following activity contributes more to water pollution than any other throughout world?

Options :

1. ✘ Industry
2. ✘ Hydroelectric power generation
3. ✘ Urbanization
4. ✔ Agriculture

Question Number : 64 Question Id : 97103631085 Display Question Number : Yes Is Question Mandatory : No Calculator : None Response Time : N.A Think Time : N.A Minimum Instruction Time : 0

Which of the following is not a water-borne disease?

Options :

1. ✘ Cholera
2. ✘ Hepatitis
3. ✘ Typhoid
4. ✔ Dengue

Question Number : 65 Question Id : 97103631086 Display Question Number : Yes Is Question Mandatory : No Calculator : None Response Time : N.A Think Time : N.A Minimum Instruction Time : 0

Which of the following is not a renewable natural resource?

Options :

1. ✘ Fresh water

2. ✘ Clean water

3. ✔ Salt

4. ✘ Fertile soil

Question Number : 66 Question Id : 97103631087 Display Question Number : Yes Is Question Mandatory : No Calculator : None Response Time : N.A Think Time : N.A Minimum Instruction Time : 0

The chemical formula for Baking soda is _____

Options :

1. ✘ NH_4Cl

2. ✔ NaHCO_3

3. ✘ $\text{Na}_2\text{CO}_3\text{H}_2\text{O}$

4. ✘ CH_3COOH

Question Number : 67 Question Id : 97103631088 Display Question Number : Yes Is Question Mandatory : No Calculator : None Response Time : N.A Think Time : N.A Minimum Instruction Time : 0

Which was the Cultural Capital of Andhra Pradesh?

Options :

1. ✘ Tirupati

2. ✘ Visakhapatnam

3. ✔ Rajamahendravaram

4. ✘ Amaravathi

Question Number : 68 Question Id : 97103631089 Display Question Number : Yes Is Question Mandatory : No Calculator : None Response Time : N.A Think Time : N.A Minimum Instruction Time : 0

Koundinya wildlife sanctuary is located in which of the following states?

Options :

1. ✔ Andhra Pradesh

2. ✘ Kerala

3. ✘ Tamil Nadu

4. ✘ Karnataka

Question Number : 69 Question Id : 97103631090 Display Question Number : Yes Is Question Mandatory : No Calculator : None Response Time : N.A Think Time : N.A Minimum Instruction Time : 0

National council for women education was established in _____

Options :

1. ✔ 1958

2. ✘ 1976

3. ✘ 1989

4. ✘ 1965

Question Number : 70 Question Id : 97103631091 Display Question Number : Yes Is Question Mandatory : No Calculator : None Response Time : N.A Think Time : N.A Minimum Instruction Time : 0

Autonomy in higher education system implies freedom in _____

Options :

1. ✘ Administration

2. ✓ Curriculum development

3. ✘ Finance

4. ✘ Policy-making

SANSKRIT

Section Id :	971036442
Section Number :	2
Mandatory or Optional :	Mandatory
Number of Questions :	70
Section Marks :	70
Enable Mark as Answered Mark for Review and Clear Response :	Yes
Maximum Instruction Time :	0
Is Section Default? :	null

Question Number : 71 Question Id : 97103631092 Display Question Number : Yes Is Question Mandatory : No Calculator : None Response Time : N.A Think Time : N.A Minimum Instruction Time : 0

ऋग्वेदीय षष्ठमण्डलस्य ऋषिः _____

Options :

1. ✘ वामदेवः

2. ✘ विश्वामित्रः

3. ✓ भरद्वाजः

4. ✘ प्रजापतिः

Question Number : 72 Question Id : 97103631093 Display Question Number : Yes Is Question Mandatory : No Calculator : None Response Time : N.A Think Time : N.A Minimum Instruction Time : 0

नासत्यौ इति कयोः नाम ?

Options :

1. ✘ इन्द्रावरुणयोः

2. ✘ द्यावापृथिव्योः

3. ✓ अश्विनोः

4. ✘ सूर्यसोमयोः

Question Number : 73 Question Id : 97103631094 Display Question Number : Yes Is Question Mandatory : No Calculator : None Response Time : N.A Think Time : N.A Minimum Instruction Time : 0

ऋक्प्रातिशाख्यानुसारेण स्वराः कियन्तः ?

Options :

1. ✘ वृद्धिः

2. ✘ चतुर्विधा:

3. ✘ पञ्चविधा:

4. ✔ त्रिविधा:

Question Number : 74 Question Id : 97103631095 Display Question Number : Yes Is Question Mandatory : No Calculator : None Response Time : N.A Think Time : N.A Minimum Instruction Time : 0

अग्निसूक्तस्य ऋषिः कः ?

Options :

1. ✘ हिरण्यगर्भः

2. ✘ प्रजापतिः

3. ✘ भरद्वाजः

4. ✔ मधुच्छन्दः

Question Number : 75 Question Id : 97103631096 Display Question Number : Yes Is Question Mandatory : No Calculator : None Response Time : N.A Think Time : N.A Minimum Instruction Time : 0

माध्यन्दिनशाखासम्बन्धि वेदविशेषः _____

Options :

1. ✘ ऋग्वेदः
2. ✘ सामवेदः
3. ✘ कृष्णयजुर्वेदः
4. ✔ शुक्लयजुर्वेदः

Question Number : 76 Question Id : 97103631097 Display Question Number : Yes Is Question Mandatory : No Calculator : None Response Time : N.A Think Time : N.A Minimum Instruction Time : 0

“होतारं रत्नधातमम्” इति संस्तुतः देवताविशेषः कः ?

Options :

1. ✘ वरुणः
2. ✔ अग्निः
3. ✘ सविता
4. ✘ सोमः

Question Number : 77 Question Id : 97103631098 Display Question Number : Yes Is Question

Mandatory : No Calculator : None Response Time : N.A Think Time : N.A Minimum Instruction Time : 0

व्याकरणशास्त्रगतमहाभाष्यमनुसृत्य अथर्ववेदस्य कतिशाखाः समुपलभ्यन्ते ?

Options :

1. ✘ 05

2. ✔ 09

3. ✘ 21

4. ✘ 100

Question Number : 78 Question Id : 97103631099 Display Question Number : Yes Is Question Mandatory : No Calculator : None Response Time : N.A Think Time : N.A Minimum Instruction Time : 0

नैतत् सामवेदस्य ब्राह्मणम् _____

Options :

1. ✘ आर्षेयब्राह्मणम्

2. ✘ देवताध्यायब्राह्मणम्

3. ✔ कपिष्ठलब्राह्मणम्

4. ✘ मन्त्रब्राह्मणम्

Question Number : 79 Question Id : 97103631100 Display Question Number : Yes Is Question Mandatory : No Calculator : None Response Time : N.A Think Time : N.A Minimum Instruction Time : 0

“सप्तऋषि”रिति संस्तुतः देवः _____

Options :

1. ✘ सविता

2. ✔ इन्द्रः

3. ✘ वरुणः

4. ✘ सोमः

Question Number : 80 Question Id : 97103631101 Display Question Number : Yes Is Question Mandatory : No Calculator : None Response Time : N.A Think Time : N.A Minimum Instruction Time : 0

अन्तरिक्षस्थः देवः _____

Options :

1. ✘ बृहस्पतिः

2. ✘ सूर्यः

3. ✔ रुद्रः

4. ✖ सोमः

Question Number : 81 Question Id : 97103631102 Display Question Number : Yes Is Question Mandatory : No Calculator : None Response Time : N.A Think Time : N.A Minimum Instruction Time : 0

तैत्तिरीयोपनिषदि समाम्नातः उपान्तिमः कोशः कः ?

Options :

1. ✖ प्राणमयः

2. ✖ अनन्दमयः

3. ✖ मनोमयः

4. ✔ विज्ञानमयः

Question Number : 82 Question Id : 97103631103 Display Question Number : Yes Is Question Mandatory : No Calculator : None Response Time : N.A Think Time : N.A Minimum Instruction Time : 0

‘प्रमाता’ अस्ति _____

Options :

1. ✖ विषयः

2. ✖ सम्बन्धः

3. ✔ अधिकारी

4. ✖ प्रयोजनम्

Question Number : 83 Question Id : 97103631104 Display Question Number : Yes Is Question Mandatory : No Calculator : None Response Time : N.A Think Time : N.A Minimum Instruction Time : 0

सावित्रीवाचनमिति कस्य संस्कारस्य नामान्तरम् ?

Options :

1. ✖ चूडाकर्ण

2. ✖ पञ्चमहायज्ञ

3. ✔ उपनयन

4. ✖ नामकरण

Question Number : 84 Question Id : 97103631105 Display Question Number : Yes Is Question Mandatory : No Calculator : None Response Time : N.A Think Time : N.A Minimum Instruction Time : 0

वैदिकस्वर प्रक्रियायाः वृत्तिकारः _____

Options :

1. ✖ वररुचिः

2. ✖ नागेशभट्टः

3. ✘ पतञ्जलिः

4. ✔ भट्टोजि दीक्षितः

Question Number : 85 Question Id : 97103631106 Display Question Number : Yes Is Question Mandatory : No Calculator : None Response Time : N.A Think Time : N.A Minimum Instruction Time : 0

षड् भावविकारेषु एतन्न परिगण्यते _____

Options :

1. ✘ वर्धते

2. ✔ अवलोकयते

3. ✘ अपक्षीयते

4. ✘ विनश्यति

Question Number : 86 Question Id : 97103631107 Display Question Number : Yes Is Question Mandatory : No Calculator : None Response Time : N.A Think Time : N.A Minimum Instruction Time : 0

अथर्ववेदसम्बन्धिनी उपनिषत् _____

Options :

1. ✘ केनोपनिषत्

2.

✘ ईशोपनिषत्

3. ✔ मुण्डकोपनिषत्

4. ✘ कठोपनिषत्

Question Number : 87 Question Id : 97103631108 Display Question Number : Yes Is Question Mandatory : No Calculator : None Response Time : N.A Think Time : N.A Minimum Instruction Time : 0

“एको देवः सर्वभूतेषु _____” इति कस्याम् उपनिषदि समुद् घोषितः?

Options :

1. ✘ छान्दोग्य

2. ✔ श्वेताश्वतर

3. ✘ बृहदारण्यक

4. ✘ ईश

Question Number : 88 Question Id : 97103631109 Display Question Number : Yes Is Question Mandatory : No Calculator : None Response Time : N.A Think Time : N.A Minimum Instruction Time : 0

गुरुपदिष्टवेदान्तवाक्येषु विश्वासः किमित्यभिधीयते ?

Options :

1. ✘ दमः

2. ✘ शमः

3. ✘ मुमुक्षा

4. ✔ श्रद्धा

Question Number : 89 Question Id : 97103631110 Display Question Number : Yes Is Question Mandatory : No Calculator : None Response Time : N.A Think Time : N.A Minimum Instruction Time : 0

“अथातोब्रह्मजिज्ञासा” इत्यत्र ‘अथ’ शब्दः कस्मिन्नर्थे संप्रयुक्तः ?

Options :

1. ✘ अधिकारार्थे

2. ✘ अन्वयार्थे

3. ✔ आनन्तर्यार्थे

4. ✘ हेत्वर्थे

Question Number : 90 Question Id : 97103631111 Display Question Number : Yes Is Question Mandatory : No Calculator : None Response Time : N.A Think Time : N.A Minimum Instruction Time : 0

वेदपुरुषस्य चलनात्मकं कर्म केन सम्भवति ?

Options :

1. ✓ छन्दः
2. ✘ ज्योतिषम्
3. ✘ निरुक्तम्
4. ✘ शिक्षा

Question Number : 91 Question Id : 97103631112 Display Question Number : Yes Is Question Mandatory : No Calculator : None Response Time : N.A Think Time : N.A Minimum Instruction Time : 0

आख्यातं _____

Options :

1. ✘ प्रत्ययसाधनम्
2. ✓ भावप्रधानम्
3. ✘ उपसर्गप्रधानम्
4. ✘ क्रियाप्रधानम्

Question Number : 92 Question Id : 97103631113 Display Question Number : Yes Is Question Mandatory : No Calculator : None Response Time : N.A Think Time : N.A Minimum Instruction

Time : 0

“वेदोऽखिलो-धर्ममूलं स्मृतिशीले च तद्विदाम्।

आचारश्चैव साधूनामात्मनस्तुष्टिरेव च।।”

-इति कस्यां स्मृतौ समुदधोषितम् ?

Options :

1. ✘ कौण्डिन्य

2. ✘ याज्ञवल्क्य

3. ✔ मनु

4. ✘ पराशर

Question Number : 93 Question Id : 97103631114 Display Question Number : Yes Is Question Mandatory : No Calculator : None Response Time : N.A Think Time : N.A Minimum Instruction

Time : 0

प्रायश्चित्तकर्माणि _____

Options :

1. ✘ ज्योतिष्टोमादीनि

2. ✘ सन्ध्यावन्दनानि

3. ✘ हननादीनि

4. ✔

चान्द्रायणादीनि

Question Number : 94 Question Id : 97103631115 Display Question Number : Yes Is Question Mandatory : No Calculator : None Response Time : N.A Think Time : N.A Minimum Instruction Time : 0

विज्ञानमेवात्मा इति कस्मिन् दर्शने सिद्धान्तितः ?

Options :

1. ✘ मीमांसा
2. ✔ सौगत
3. ✘ चार्वाक
4. ✘ जैन

Question Number : 95 Question Id : 97103631116 Display Question Number : Yes Is Question Mandatory : No Calculator : None Response Time : N.A Think Time : N.A Minimum Instruction Time : 0

अन्नंभट्टानुसारं कर्मभेदेषु एषः न परिगण्यते।

Options :

1. ✘ उत्क्षेपणम्
2. ✘ प्रसारणम्
3. ✔

✓ प्रयत्नः

4. ✘ अपक्षेपणम्

Question Number : 96 Question Id : 97103631117 Display Question Number : Yes Is Question Mandatory : No Calculator : None Response Time : N.A Think Time : N.A Minimum Instruction Time : 0

“शब्दो नित्यः शब्दत्वात्” इत्यत्र कः हेत्वाभासः ?

Options :

1. ✘ विरुद्धः

2. ✘ साधारणः

3. ✘ असाधारणः

4. ✓ बाधितः

Question Number : 97 Question Id : 97103631118 Display Question Number : Yes Is Question Mandatory : No Calculator : None Response Time : N.A Think Time : N.A Minimum Instruction Time : 0

पञ्चावयववाक्येषु एतन्नान्तर्भवति _____

Options :

1. ✘ उदाहरणम्

2. ✘

निगमनम्

3. ✓ अनुबन्धः

4. ✗ हेतुः

Question Number : 98 Question Id : 97103631119 Display Question Number : Yes Is Question Mandatory : No Calculator : None Response Time : N.A Think Time : N.A Minimum Instruction Time : 0

अर्थसंग्रहानुसारं विधिः कति प्रकारकः ?

Options :

1. ✗ द्विविधः

2. ✗ त्रिविधः

3. ✓ चतुर्विधः

4. ✗ पञ्चविधः

Question Number : 99 Question Id : 97103631120 Display Question Number : Yes Is Question Mandatory : No Calculator : None Response Time : N.A Think Time : N.A Minimum Instruction Time : 0

भाषिक ध्वनिवर्गीकरणे आधारभूताः _____

Options :

1. ✘ उदान्त-अनुदात्त-स्वरिता:

2. ✘ कण्ठ-तालु-मूर्धा:

3. ✘ सम-विषम-आगमा:

4. ✔ स्थान-प्रयत्न-करणानि

Question Number : 100 Question Id : 97103631121 Display Question Number : Yes Is Question Mandatory : No Calculator : None Response Time : N.A Think Time : N.A Minimum Instruction Time : 0

सांख्यदर्शनानुसारं “संसरति, बध्यते, मुच्यते च” सा का ?

Options :

1. ✘ बुद्धि:

2. ✘ शुद्धि:

3. ✔ प्रकृति:

4. ✘ विकृति:

Question Number : 101 Question Id : 97103631122 Display Question Number : Yes Is Question Mandatory : No Calculator : None Response Time : N.A Think Time : N.A Minimum Instruction Time : 0

सुप्रसिद्ध ध्वनिनियमेषु अर्वाचीनः कः ?

Options :

1. ✘ ग्रिम् नियमः
2. ✔ वेर्नर् नियमः
3. ✘ विण्टर् निट्ज् नियमः
4. ✘ ग्रास् मान् नियमः

Question Number : 102 Question Id : 97103631123 Display Question Number : Yes Is Question Mandatory : No Calculator : None Response Time : N.A Think Time : N.A Minimum Instruction Time : 0

ध्वनिविज्ञानविभिद्भिः करणत्वेन किम् उररीक्रयते ?

Options :

1. ✔ मृदुतालुः
2. ✘ नासिकाविवरः
3. ✘ वर्त्सः
4. ✘ ऊर्ध्वोष्ठः

Question Number : 103 Question Id : 97103631124 Display Question Number : Yes Is Question

Mandatory : No Calculator : None Response Time : N.A Think Time : N.A Minimum Instruction Time : 0

‘रामेण बाणेन हतो वाली’ इत्यत्र तृतीयाविभक्तिः केन सूत्रेण विधीयते ?

Options :

1. ✓ साधकतमं करणम्
2. ✗ हेतौ
3. ✗ अकथितञ्च
4. ✗ स्वतन्त्रः कर्ता

Question Number : 104 Question Id : 97103631125 Display Question Number : Yes Is Question Mandatory : No Calculator : None Response Time : N.A Think Time : N.A Minimum Instruction Time : 0

‘अन्तर्वत्नी’ इत्यत्र वत्वविधायकं सूत्रं किम् ?

Options :

1. ✗ पत्युर्नो यज्ञसंयोगे
2. ✗ नित्यं सपत्न्यादिषु
3. ✗ मनोरौ वा
4. ✓ अन्तर्वत् पतिवतोर्नृक्

Question Number : 105 Question Id : 97103631126 Display Question Number : Yes Is Question Mandatory : No Calculator : None Response Time : N.A Think Time : N.A Minimum Instruction Time : 0

“स्थाल्यां पचति” इत्यत्र सप्तमी विभक्तिः केन सूत्रेण विधीयते ?

Options :

1. ✘ यस्य च भावेन भावलक्षणम्
2. ✘ कृत्यानां कर्तरि वा
3. ✔ सप्तम्यधिकरणे च
4. ✘ अधिकरणवाचिनश्च

Question Number : 106 Question Id : 97103631127 Display Question Number : Yes Is Question Mandatory : No Calculator : None Response Time : N.A Think Time : N.A Minimum Instruction Time : 0

“कर्तृकरणे कृता बहुलम्।” इति सूत्रस्य उदाहरणम् _____

Options :

1. ✘ अधिहरिः
2. ✔ हरित्रातः
3. ✘ हरिश्रितः

4. ✖ हरिपूर्वः

Question Number : 107 Question Id : 97103631128 Display Question Number : Yes Is Question Mandatory : No Calculator : None Response Time : N.A Think Time : N.A Minimum Instruction Time : 0

“उपमानानि सामान्यवचनैः” इति सूत्रस्य उदाहरणम् _____

Options :

1. ✖ कृष्णसर्पः

2. ✔ घनश्यामः

3. ✖ पार्थसारथिः

4. ✖ पञ्चगङ्गम्

Question Number : 108 Question Id : 97103631129 Display Question Number : Yes Is Question Mandatory : No Calculator : None Response Time : N.A Think Time : N.A Minimum Instruction Time : 0

लोके सुप्रसिद्धं विष्णुसहस्रनाम स्तोत्रं महाभारते कस्मिन् पर्वणि दृश्यते ?

Options :

1. ✔ आनुशासनिके

2. ✖ विराटपर्वणि

3. ✖ भीष्मपर्वणि

4. ✖ सभापर्वणि

Question Number : 109 Question Id : 97103631130 Display Question Number : Yes Is Question Mandatory : No Calculator : None Response Time : N.A Think Time : N.A Minimum Instruction Time : 0

“अमुष्य विद्या रसनाग्रनर्तकी त्रयीव नीताङ्गगुणेन विस्तरम्” इति पद्यभागः कस्मिन् महाकाव्ये लोचनगोचरीक्रियते ?

Options :

1. ✖ रघुवंशे

2. ✖ कुमारसंभवे

3. ✖ शिशुपालवधे

4. ✔ नैषधीयचरिते

Question Number : 110 Question Id : 97103631131 Display Question Number : Yes Is Question Mandatory : No Calculator : None Response Time : N.A Think Time : N.A Minimum Instruction Time : 0

अतादृशि गुणीभूतव्यङ्ग्यं व्यङ्ग्ये तु _____

Options :

1. ✖ उत्तमम्

2. ✘ उत्तमोत्तमम्

3. ✔ मध्यमम्

4. ✘ अधमम्

Question Number : 111 Question Id : 97103631132 Display Question Number : Yes Is Question Mandatory : No Calculator : None Response Time : N.A Think Time : N.A Minimum Instruction Time : 0

मृच्छकटिके चारुदत्तः कीदृशः नायकः?

Options :

1. ✘ धीरोदात्तः

2. ✘ धीरोद्धतः

3. ✔ धीरशान्तः

4. ✘ धीरललितः

Question Number : 112 Question Id : 97103631133 Display Question Number : Yes Is Question Mandatory : No Calculator : None Response Time : N.A Think Time : N.A Minimum Instruction Time : 0

नायिकापात्र रहितं नाटकं _____

Options :

1. ✘ वेणीसंहारम्
2. ✘ स्वप्नवासवदत्तम्
3. ✔ मुद्राराक्षसम्
4. ✘ उत्तररामचरितम्

Question Number : 113 Question Id : 97103631134 Display Question Number : Yes Is Question Mandatory : No Calculator : None Response Time : N.A Think Time : N.A Minimum Instruction Time : 0

त्रिविक्रमभट्टेन विरचितं चम्पूकाव्यं _____

Options :

1. ✘ विश्वगुणादर्शचम्पूः
2. ✘ चम्पूरामायणम्
3. ✔ नलचम्पूः
4. ✘ भागवतचम्पूः

Question Number : 114 Question Id : 97103631135 Display Question Number : Yes Is Question Mandatory : No Calculator : None Response Time : N.A Think Time : N.A Minimum Instruction

Time : 0

शिशुपालवध महाकाव्यस्य प्रथमसर्गे कस्य महर्षेः आगमनं समुपवर्ण्यते ?

Options :

1. ✘ वेदव्यासः

2. ✘ पराशरः

3. ✔ नारदः

4. ✘ शुकः

Question Number : 115 Question Id : 97103631136 Display Question Number : Yes Is Question Mandatory : No Calculator : None Response Time : N.A Think Time : N.A Minimum Instruction

Time : 0

पदवाक्यप्रमाणज्ञः इति विख्यातः रूपककारः _____

Options :

1. ✘ कालिदासः

2. ✘ श्रीहर्षः

3. ✔ भवभूतिः

4. ✘ भासः

Question Number : 116 Question Id : 97103631137 Display Question Number : Yes Is Question Mandatory : No Calculator : None Response Time : N.A Think Time : N.A Minimum Instruction Time : 0

महाश्वेतायाः आश्रमः कुत्र आसीत् ?

Options :

1. ✘ हेमकूट शिखरे
2. ✔ अच्छोदसरोवरस्य पार्श्वे
3. ✘ पम्पासरोवरस्य पार्श्वे
4. ✘ अलकायाः पार्श्वे

Question Number : 117 Question Id : 97103631138 Display Question Number : Yes Is Question Mandatory : No Calculator : None Response Time : N.A Think Time : N.A Minimum Instruction Time : 0

किरातार्जुनीये महाकाव्ये चारचक्षुः कः ?

Options :

1. ✘ अर्जुनः
2. ✘ श्रीकृष्णः
3. ✔ युधिष्ठिरः
4. ✘ वनेचरः

Question Number : 118 Question Id : 97103631139 Display Question Number : Yes Is Question Mandatory : No Calculator : None Response Time : N.A Think Time : N.A Minimum Instruction Time : 0

पद्मपुराणस्य खण्डविशेषः एषः नास्ति। _____

Options :

1. ✘ सृष्टिखण्डः

2. ✔ पूर्वखण्डः

3. ✘ उत्तरखण्डः

4. ✘ भूमिखण्डः

Question Number : 119 Question Id : 97103631140 Display Question Number : Yes Is Question Mandatory : No Calculator : None Response Time : N.A Think Time : N.A Minimum Instruction Time : 0

श्रीमद्रामायणे आदित्यहृदयस्तोत्रं श्रीरामं कः उपदिदेशः ?

Options :

1. ✘ वशिष्ठः

2. ✘ विश्वामित्रः

3. ✔ अगस्त्यः

4. ✘ शतानन्दः

Question Number : 120 Question Id : 97103631141 Display Question Number : Yes Is Question Mandatory : No Calculator : None Response Time : N.A Think Time : N.A Minimum Instruction Time : 0

नाट्यशास्त्रगतः रसरूपांशः कस्मात् वेदात् विरचितः ?

Options :

1. ✘ ऋग्वेदात्

2. ✘ यजुर्वेदात्

3. ✘ सामवेदात्

4. ✔ अथर्वणवेदात्

Question Number : 121 Question Id : 97103631142 Display Question Number : Yes Is Question Mandatory : No Calculator : None Response Time : N.A Think Time : N.A Minimum Instruction Time : 0

स्थायिभावेषु, सञ्चारिभावेषु च परिगण्यमानः भावविशेषः कः ?

Options :

1. ✘ रतिः

2. ✘ उत्साहः

3. ✘ ग्लानिः

4. ✔ निर्वेदः

Question Number : 122 Question Id : 97103631143 Display Question Number : Yes Is Question Mandatory : No Calculator : None Response Time : N.A Think Time : N.A Minimum Instruction Time : 0

महाभारत गतसंग्रामानन्तरं श्रीकृष्णः केन पात्रेण अभिशप्तः ?

Options :

1. ✘ दुर्वासाः

2. ✘ भृगुः

3. ✘ सुधेष्णा

4. ✔ गान्धारी

Question Number : 123 Question Id : 97103631144 Display Question Number : Yes Is Question Mandatory : No Calculator : None Response Time : N.A Think Time : N.A Minimum Instruction Time : 0

श्रीमद् भागवते गजेन्द्रमोक्षवृत्तान्तः कस्मिन् स्कन्धे समुपवर्णितः ?

Options :

1. ✘ दशम

2. ✘ नवम

3. ✔ अष्टम

4. ✘ सप्तम

Question Number : 124 Question Id : 97103631145 Display Question Number : Yes Is Question Mandatory : No Calculator : None Response Time : N.A Think Time : N.A Minimum Instruction Time : 0

अधोनिर्दिष्टेषु भरत-शतृघ्नयोः पत्न्यौ के ?

Options :

1. ✘ ऊर्मिला - शृतकीर्ति

2. ✘ माण्डवी - मञ्जुकेशी

3. ✔ माण्डवी - शृतकीर्ति

4. ✘ ऊर्मिला - माण्डवी

Question Number : 125 Question Id : 97103631146 Display Question Number : Yes Is Question Mandatory : No Calculator : None Response Time : N.A Think Time : N.A Minimum Instruction Time : 0

छन्दश्शास्त्रगतः वृत्तरत्नाकरः केन प्रणीतः ?

Options :

1. ✓ केदार भट्टेन
2. ✘ केशव भट्टेन
3. ✘ अन्नं भट्टेन
4. ✘ नाशयण बट्टेन

Question Number : 126 Question Id : 97103631147 Display Question Number : Yes Is Question Mandatory : No Calculator : None Response Time : N.A Think Time : N.A Minimum Instruction Time : 0

क्रीडनीयकमिच्छामो दृश्यं श्रुत्यं च यद् भवेत्।
इति के कम् अभ्यर्थितवन्तः ?

Options :

1. ✓ इन्द्रादयः - ब्रह्माणम्
2. ✘ भरतादयः - शिवम्
3. ✘ नारदादयः - विष्णुम्
4. ✘ अप्यसशङ्गना - सरसवतीम्

Question Number : 127 Question Id : 97103631148 Display Question Number : Yes Is Question Mandatory : No Calculator : None Response Time : N.A Think Time : N.A Minimum Instruction Time : 0

हर्षचरितं कस्मिन् गद्यकाव्यप्रभेदे अन्तर्भवति।

Options :

1. ✘ मुक्तकम्
2. ✘ चूर्णकम्
3. ✘ कथा
4. ✔ आख्यायिका

Question Number : 128 Question Id : 97103631149 Display Question Number : Yes Is Question Mandatory : No Calculator : None Response Time : N.A Think Time : N.A Minimum Instruction Time : 0

कुमारसम्भवस्य प्रथमः श्लोकः कस्योदाहरणम् ?

Options :

1. ✘ प्रस्तावनायाः
2. ✘ नमस्कियायाः
3. ✘ प्रार्थनायाः
4. ✔ वस्तुनिर्देशस्य

Question Number : 129 Question Id : 97103631150 Display Question Number : Yes Is Question Mandatory : No Calculator : None Response Time : N.A Think Time : N.A Minimum Instruction Time : 0

भोजराजकृत चम्पूरामायणस्य युध्दकाण्डं केन रचितम् ?

Options :

1. ✘ वेङ्कटाध्वरिणा
2. ✘ सोमदेवसूरिणा
3. ✔ लक्ष्मणसूरिणा
4. ✘ मल्लिनाथसूरिणा

Question Number : 130 Question Id : 97103631151 Display Question Number : Yes Is Question Mandatory : No Calculator : None Response Time : N.A Think Time : N.A Minimum Instruction Time : 0

कवित्ववीजरूपः संस्कारविशेषः काव्यपकाशकारेण केन पदेन अभिहितः ?

Options :

1. ✘ प्रज्ञा
2. ✘ शमुषी
3. ✘ धीः

4. ✓ शक्ति:

Question Number : 131 Question Id : 97103631152 Display Question Number : Yes Is Question Mandatory : No Calculator : None Response Time : N.A Think Time : N.A Minimum Instruction Time : 0

सङ्केतित: _____

Options :

1. ✘ पञ्चभेदो जात्यादिर्जातिरेव वा

2. ✓ चतुर्भेदो जात्यादिजातिरेव वा

3. ✘ त्रिविधो जात्यादि:

4. ✘ षड्विधो जात्यजादि:

Question Number : 132 Question Id : 97103631153 Display Question Number : Yes Is Question Mandatory : No Calculator : None Response Time : N.A Think Time : N.A Minimum Instruction Time : 0

विश्वनाथ कविराजस्य मतानुसारं काव्यस्य उत्कर्षहेतुभूताः के ?

Options :

1. ✘ रसवदतङ्काराः

2. ✘ व्रकोक्ति - रीति - गुणादयः

3. ✔ गुणालङ्काररीतयः

4. ✘ गुणालङ्कारपाकाः

Question Number : 133 Question Id : 97103631154 Display Question Number : Yes Is Question Mandatory : No Calculator : None Response Time : N.A Think Time : N.A Minimum Instruction Time : 0

अधोनिर्दिष्टेषु पञ्चाऽवस्थाविशेषेषु एतन्नपरिगण्यते ?

Options :

1. ✘ आरम्भः

2. ✘ यत्नः

3. ✘ फलागमः

4. ✔ बिन्दुः

Question Number : 134 Question Id : 97103631155 Display Question Number : Yes Is Question Mandatory : No Calculator : None Response Time : N.A Think Time : N.A Minimum Instruction Time : 0

त्रिपुरदाहः कस्यरूपक प्रभेदस्य उदाहरणतां याति ?

Options :

1. ✘ नाटकम्

2. ✘ व्यायोगः

3. ✔ डिमः

4. ✘ ईहामृगः

Question Number : 135 Question Id : 97103631156 Display Question Number : Yes Is Question Mandatory : No Calculator : None Response Time : N.A Think Time : N.A Minimum Instruction Time : 0

अर्थशास्त्रानुसारं सर्वविद्यानां प्रदीपः _____

Options :

1. ✘ वार्ता

2. ✘ दण्डनीतिः

3. ✘ त्रयी

4. ✔ आन्वीक्षिकी

Question Number : 136 Question Id : 97103631157 Display Question Number : Yes Is Question Mandatory : No Calculator : None Response Time : N.A Think Time : N.A Minimum Instruction

Time : 0

तेन ब्रूमः सहृदयमनः प्रीतये तत्स्वरूपम्

-इति कारिकापादः ध्वन्यालोकस्य _____

Options :

1. ✓ प्रतिज्ञावाक्यम्
2. ✘ उपसंहारवाक्यम्
3. ✘ सिद्धान्तवाक्यम्
4. ✘ उपक्रमवाक्यम्

Question Number : 137 Question Id : 97103631158 Display Question Number : Yes Is Question Mandatory : No Calculator : None Response Time : N.A Think Time : N.A Minimum Instruction Time : 0

भाक्तमाहुस्तमन्ये इत्यत्र भाक्त शब्देन का वृत्तिः समुद्दिष्टा ?

Options :

1. ✘ व्यञ्जनावृत्तिः
2. ✓ लक्षणावृत्तिः
3. ✘ अभिधावृत्तिः

4. ✘ तात्पर्यवृत्तिः

Question Number : 138 Question Id : 97103631159 Display Question Number : Yes Is Question Mandatory : No Calculator : None Response Time : N.A Think Time : N.A Minimum Instruction Time : 0

रससूत्रव्याख्यानावसरे चित्रतुरगन्यायः केन व्याख्यात्र संप्रयुक्तः ?

Options :

1. ✘ भट्टनायकेन

2. ✘ अभिनवगुप्तपादाचार्येण

3. ✔ श्रीशङ्कुकेन

4. ✘ भट्टलोल्लटेन

Question Number : 139 Question Id : 97103631160 Display Question Number : Yes Is Question Mandatory : No Calculator : None Response Time : N.A Think Time : N.A Minimum Instruction Time : 0

प्रकृतं यन्निषिध्यान्यत् साध्यते सा _____

Options :

1. ✘ दीपकम्

2. ✘ अतिशयोक्तिः

3. ✘ स्वभावोक्तिः

4. ✔ अपहृतिः

Question Number : 140 Question Id : 97103631161 Display Question Number : Yes Is Question Mandatory : No Calculator : None Response Time : N.A Think Time : N.A Minimum Instruction Time : 0

भर्तृवियुक्ता शकुन्तला कस्य महर्षेः आश्रमे आश्रयं प्राप्तवती ?

Options :

1. ✘ कण्वाश्रमे

2. ✔ मरीचाश्रमे

3. ✘ जावाल्याश्रमे

4. ✘ अगस्त्याश्रमे